


Δ' ΔΗΜΟΤΙΚΟ ΣΧΟΛΕΙΟ ΑΡΑΔΙΠΠΟΥ

Όνομα: _____ Τάξη: _____


Πίνακας του 10

1. Πόσα χρήματα έχει το κάθε παιδί στο πορτοφόλι του;



$$\underline{\quad} + \underline{\quad} =$$

$$\underline{\quad} \times \underline{\quad} =$$



$$\underline{\quad} + \underline{\quad} + \underline{\quad} + \underline{\quad} + \underline{\quad} =$$

$$\underline{\quad} \times \underline{\quad} =$$



$$\underline{\quad} + \underline{\quad} + \underline{\quad} + \underline{\quad} =$$

$$\underline{\quad} \times \underline{\quad} =$$




$$\underline{\quad} + \underline{\quad} + \underline{\quad} =$$

$$\underline{\quad} \times \underline{\quad} =$$




$$\underline{\quad} =$$

$$\underline{\quad} \times \underline{\quad} =$$




$$\underline{\quad} =$$

$$\underline{\quad} \times \underline{\quad} =$$



$$\underline{\quad} =$$

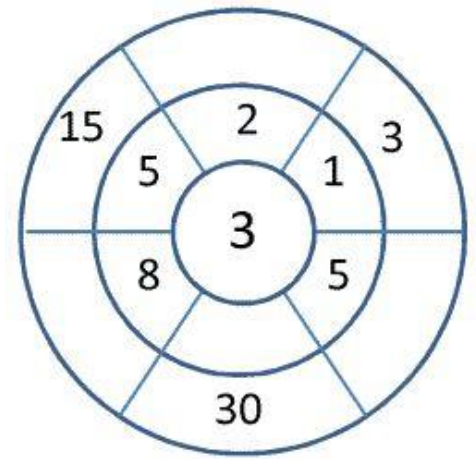
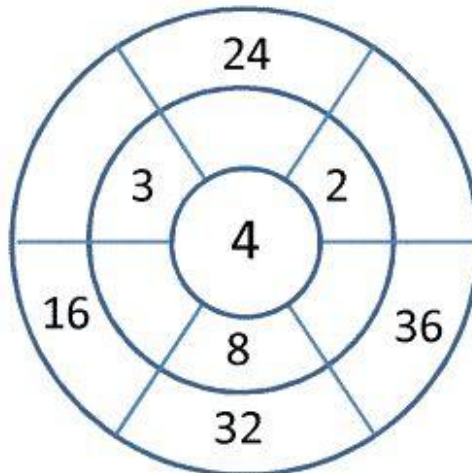
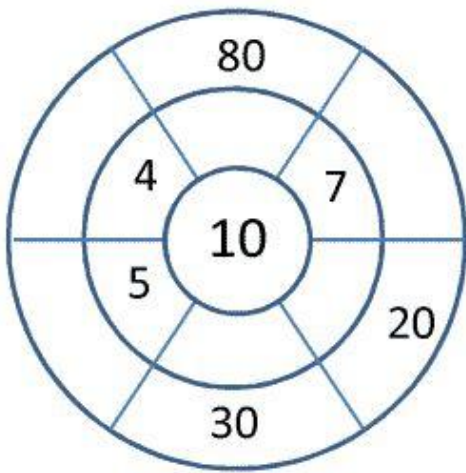
$$\underline{\quad} \times \underline{\quad} =$$








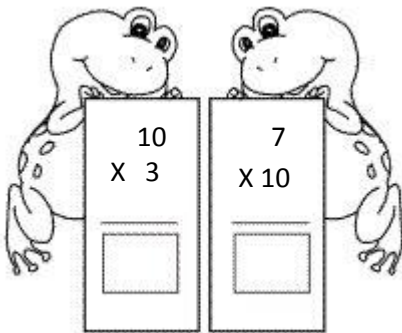
$$\underline{\quad} =$$

$$\underline{\quad} \times \underline{\quad} =$$

5. Συμπλήρωσε τους τροχούς.




6. Λύσε τις πράξεις στις καρτέλες.



7. Μάθε καλά τον πίνακα του 10.

10	X	0	=	0
10	X	1	=	10
10	X	2	=	20
10	X	3	=	30
10	X	4	=	40
10	X	5	=	50
10	X	6	=	60
10	X	7	=	70
10	X	8	=	80
10	X	9	=	90
10	X	10	=	100

For Comping Use Only. (c) WWW.123RF.COM



10 X 0 = 0
10 X 1 = 10
10 X 2 = 20
10 X 3 = 30
10 X 4 = 40
10 X 5 = 50
10 X 6 = 60
10 X 7 = 70
10 X 8 = 80
10 X 9 = 90
10 X 10 = 100

