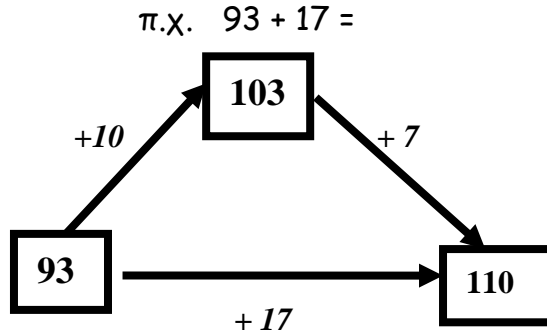
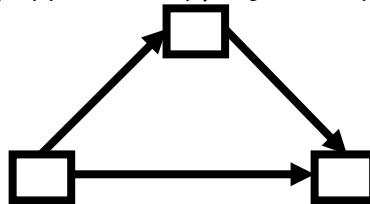


**ΝΟΕΡΕΣ ΠΡΑΞΕΙΣ ΑΦΑΙΡΕΣΗΣ  
ΤΡΙΓΩΝΙΚΟ ΔΙΑΓΡΑΜΜΑ**

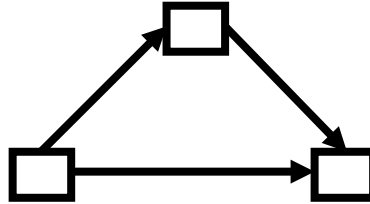


Να χρησιμοποιήσεις το τριγωνικό διάγραμμα για να βρεις τη διαφορά:

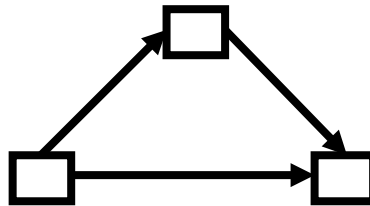
$98 + 17 =$



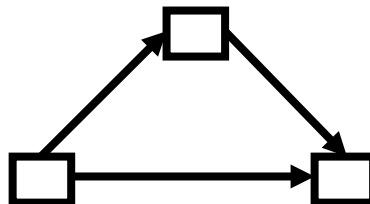
$59 + 25 =$



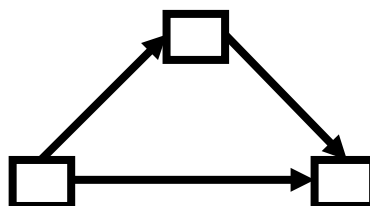
$97 + 75 =$



$387 + 8 =$



$265 + 17 =$



$699 + 50 =$

