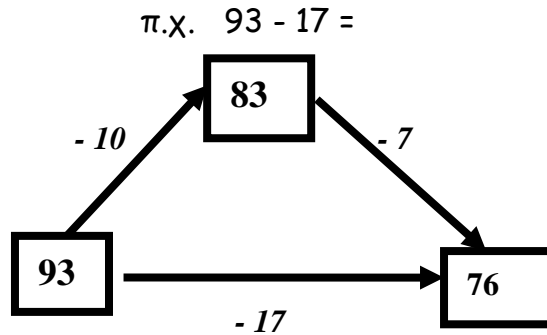
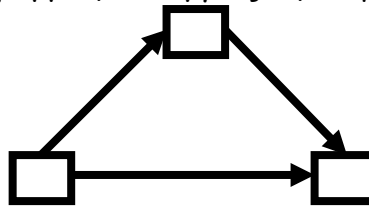


**ΝΟΕΡΕΣ ΠΡΑΞΕΙΣ ΑΦΑΙΡΕΣΗΣ
ΤΡΙΓΩΝΙΚΟ ΔΙΑΓΡΑΜΜΑ**

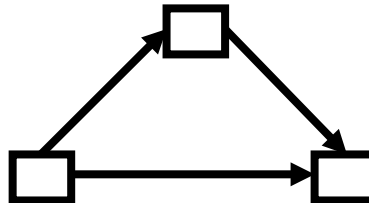


Να χρησιμοποιήσεις το τριγωνικό διάγραμμα για να βρεις τη διαφορά:

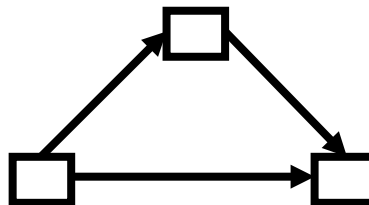
$100 - 35 =$



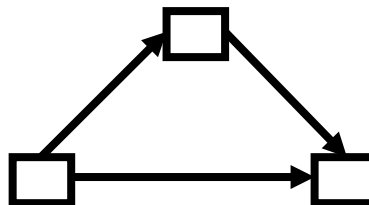
$70 - 27 =$



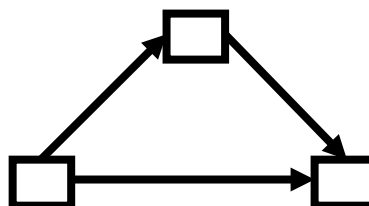
$95 - 57 =$



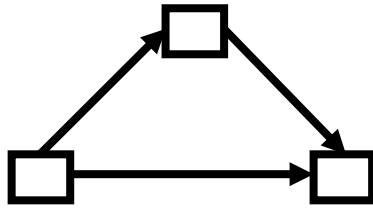
$73 - 25 =$



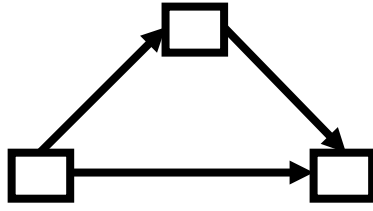
$80 - 28 =$



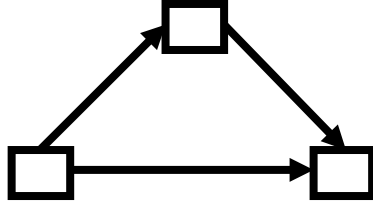
$834 - 40 =$



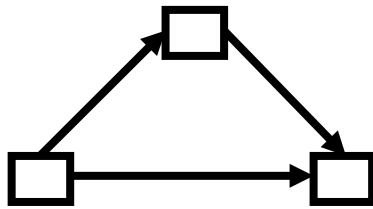
$935 - 8 =$



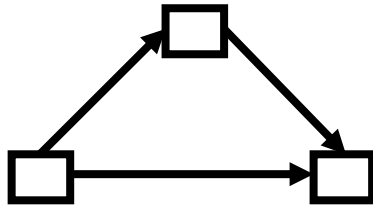
$1000 - 450 =$



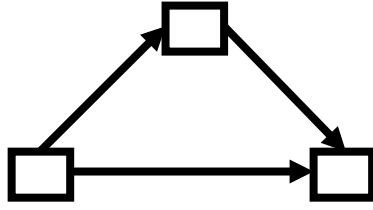
$105 - 55 =$



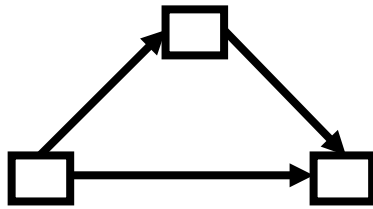
$323 - 25 =$



$510 - 80 =$



$435 - 55 =$



$723 - 67 =$

