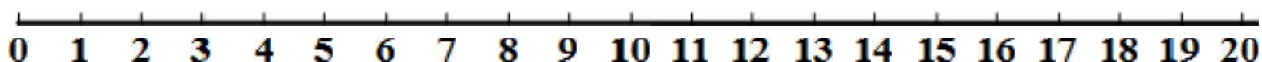




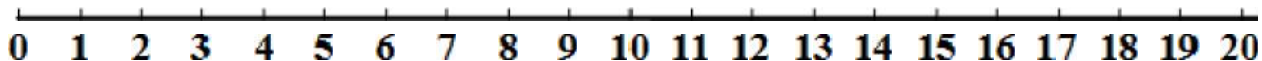
ΔΗΜΟΤΙΚΟ ΣΧΟΛΕΙΟ

Όνομα: _____ Τάξη: _____

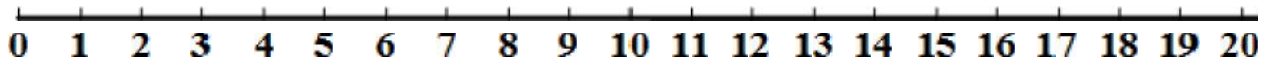
1. Λύνω τις πιο κάτω πράξεις χρησιμοποιώντας την αριθμητική γραμμή.



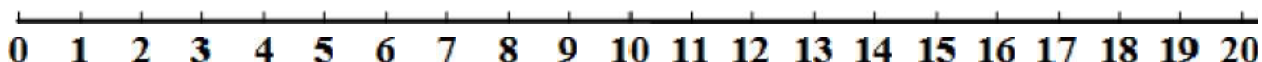
$$5 + \square = 11$$



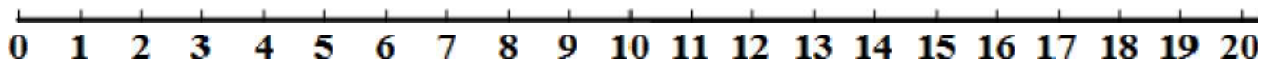
$$6 + \square = 13$$



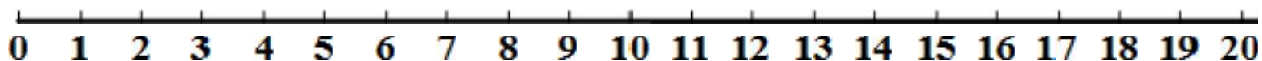
$$7 + \square = 15$$



$$\square + 8 = 17$$

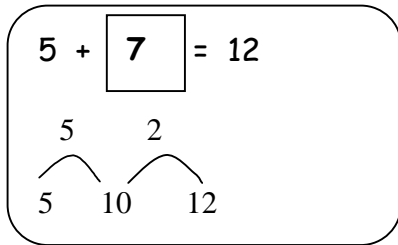


$$\square + 7 = 16$$



$$\square + 6 = 14$$

2. Τώρα προσπάθησε να κάνεις τα βήματα στο μυαλό σου όπως το παράδειγμα.



$5 + \boxed{} = 12$

$\boxed{} + 6 = 11$

$6 + \boxed{} = 14$

$7 + \boxed{} = 11$

$\boxed{} + 5 = 13$

$9 + \boxed{} = 16$

$9 + \boxed{} = 11$

$\boxed{} + 7 = 12$

$8 + \boxed{} = 14$

$8 + \boxed{} = 13$

$\boxed{} + 9 = 15$

$6 + \boxed{} = 12$

3. Να βρεις τη διαφορά όπως το παράδειγμα:

$16 - 9 = \boxed{}$



Σκέφτομαι $9 + \boxed{} = 16$

$17 - 8 = \boxed{}$



Σκέφτομαι $8 + \boxed{} = 17$

$15 - 8 = \boxed{}$



Σκέφτομαι $8 + \boxed{} = 15$

$14 - 9 = \boxed{}$



Σκέφτομαι $9 + \boxed{} = 14$

$13 - 8 = \boxed{}$



Σκέφτομαι $8 + \boxed{} = 13$