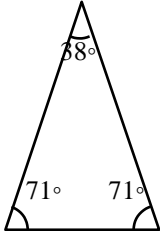


Όνομα: _____

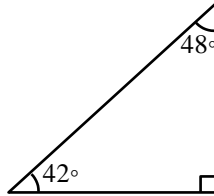
Τρίγωνα

Να αναγνωρίσεις το κάθε τρίγωνο με βάση τις γωνίες του (ορθογώνιο, οξυγώνιο, αμβλυγώνιο)

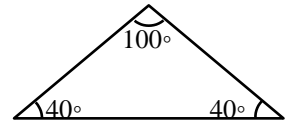
1)



2)

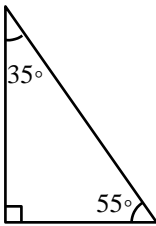


3)

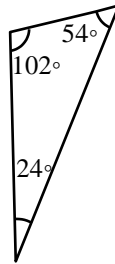


Οξυγώνιο τρίγωνο

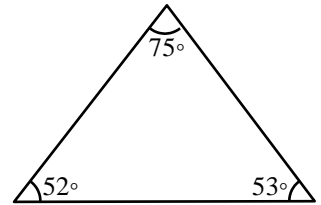
4)



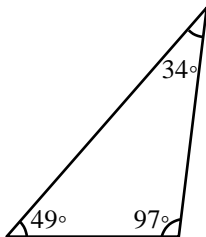
5)



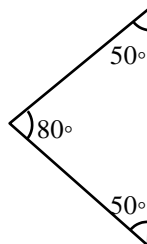
6)



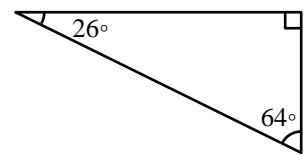
7)



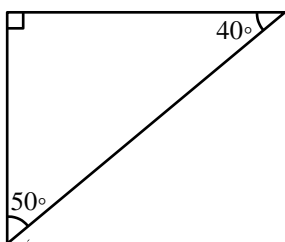
8)



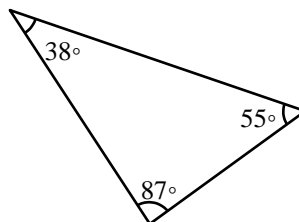
9)



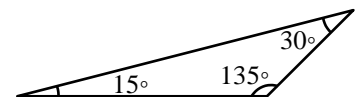
10)



11)



12)



A
n

S
w